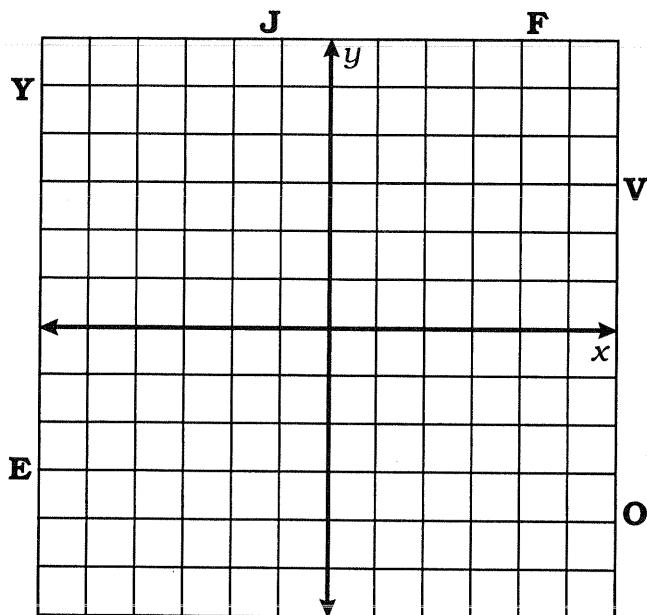
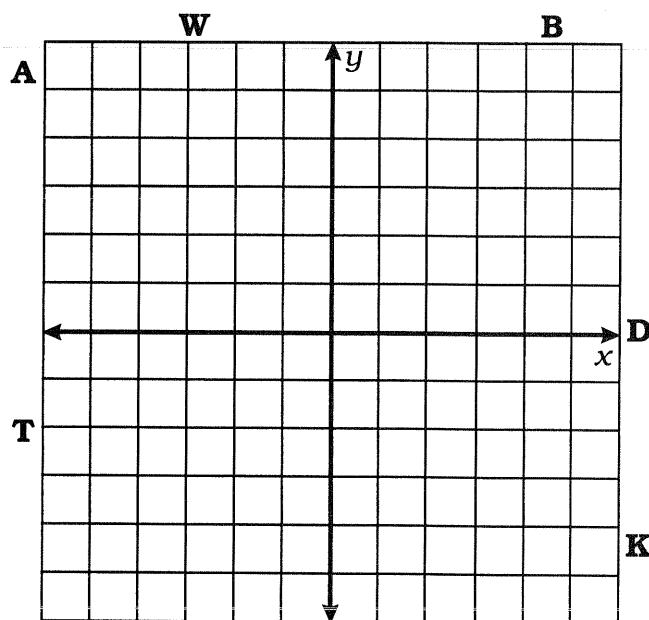


What Did the Boy Bunny Ask the Girl Bunny?

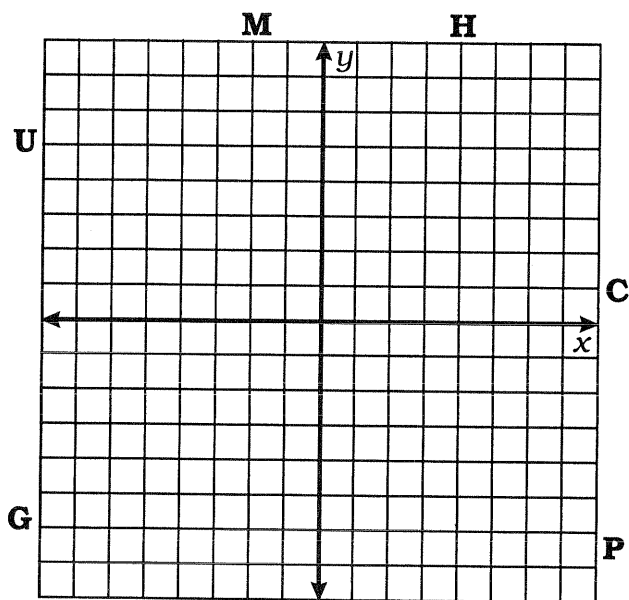
For each exercise, plot the three given points, then draw a line through them. The line, if extended, would cross a letter outside the grid. Write this letter in each box containing the exercise number.



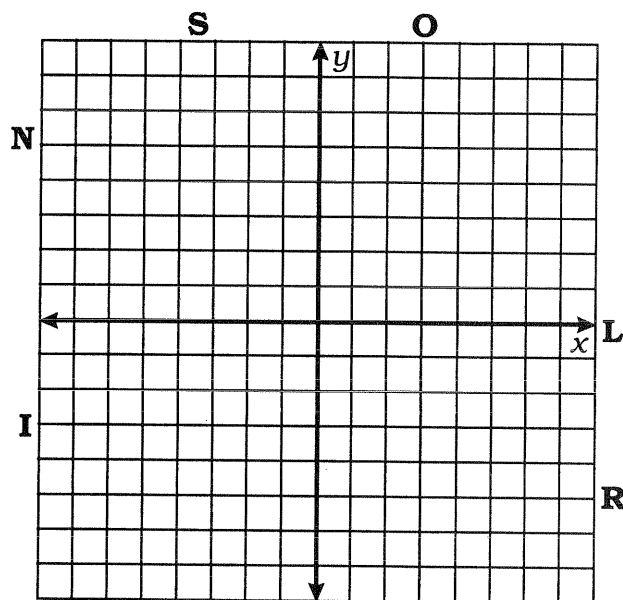
1. $(3, 4)$ $(-1, -4)$ $(1, 0)$
2. $(-5, 3)$ $(-3, 0)$ $(1, -6)$
3. $(-5, -2)$ $(5, 6)$ $(0, 2)$



4. $(-2, 1)$ $(4, -5)$ $(-5, 4)$
5. $(0, -3)$ $(4, -1)$ $(-2, -4)$
6. $(3, 1)$ $(0, 0)$ $(-6, -2)$



7. $(-7, 4)$ $(-1, -1)$ $(5, -6)$
8. $(8, -4)$ $(4, 1)$ $(0, 6)$
9. $(7, 0)$ $(1, -4)$ $(-5, -8)$



10. $(-6, 7)$ $(0, 4)$ $(6, 1)$
11. $(3, 8)$ $(3, -3)$ $(3, 0)$
12. $(-3, -5)$ $(-8, -5)$ $(5, -5)$

5	11	2	11	7	9	4	12	12	11	6	4	10	10	1	11	12	8	3
---	----	---	----	---	---	---	----	----	----	---	---	----	----	---	----	----	---	---