

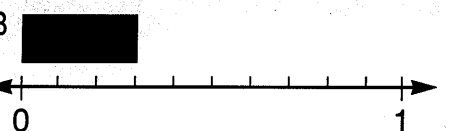
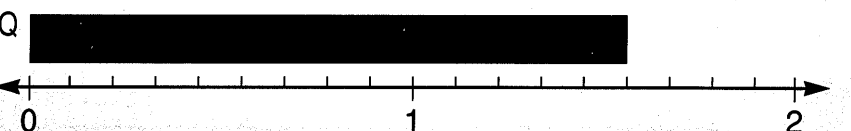

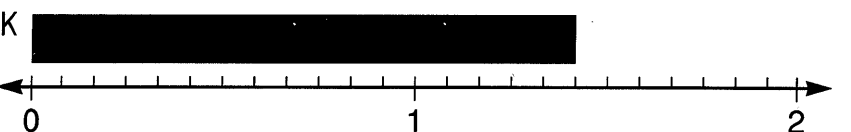
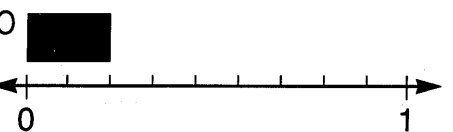
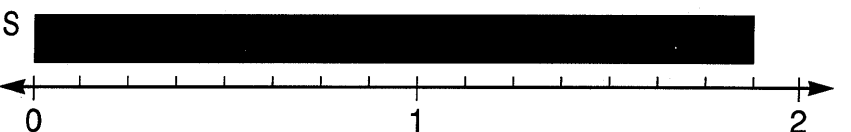
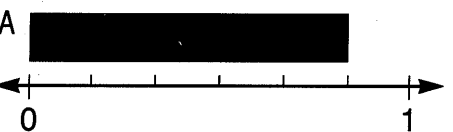
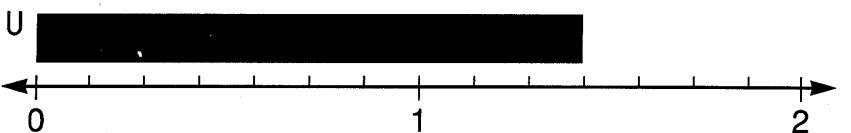
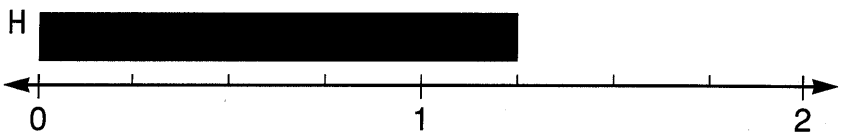

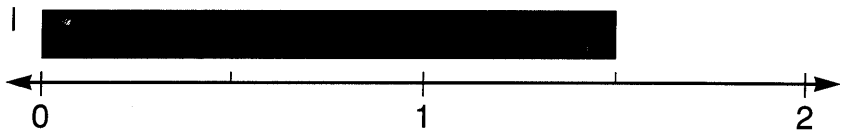
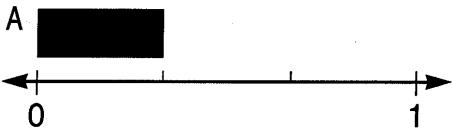
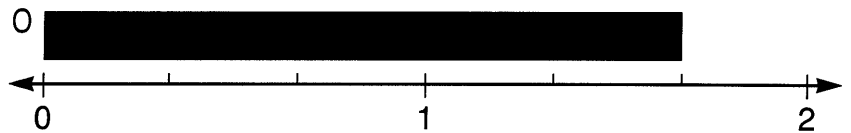



What Did the Boy Snake Say to the Girl Snake?

Write a fraction for the length of the bar above each number line. Find your answer at the bottom of the page and write the letter of the exercise above it.



$\frac{5}{4}$	$\frac{5}{3}$	$\frac{7}{12}$	$\frac{9}{10}$	$\frac{5}{6}$	$\frac{3}{10}$	$\frac{2}{9}$	$\frac{10}{7}$	$\frac{4}{5}$	$\frac{7}{16}$	$\frac{1}{3}$	$\frac{3}{13}$	$\frac{14}{9}$	$\frac{3}{4}$	$\frac{3}{8}$	$\frac{11}{16}$	$\frac{17}{12}$	$\frac{5}{8}$	$\frac{17}{10}$	$\frac{3}{2}$	$\frac{15}{8}$	$\frac{19}{16}$	